



ชื่อ - นามสกุล

คะแนน

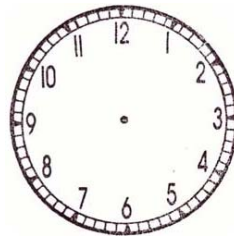
โจทย์ ให้เติมเข็มนาฬิกาตามเวลาที่กำหนด



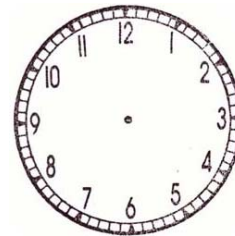
9.35




3.30




18.00




20.25



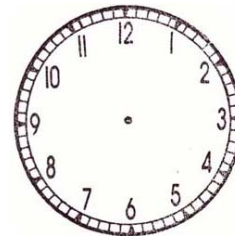
16.05




1.00




12.45



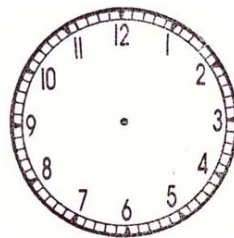
4.10



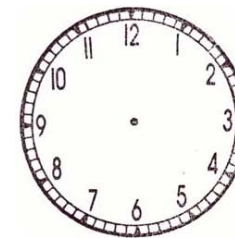
4.50



23.10



8.35



11.05