


ชื่อ – นามสกุล


คะแนน

หาผลลัพธ์จากเส้นจำนวน


1. $60 - 20 =$




2. $80 - 50 =$



3. $70 - 40 =$



4. $50 - 10 =$



5. $90 - 70 =$

