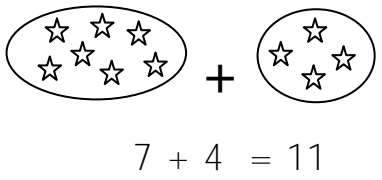
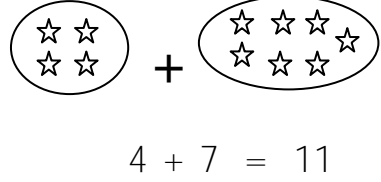
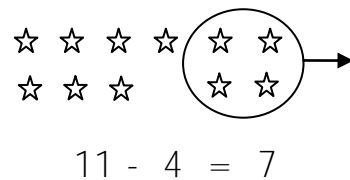
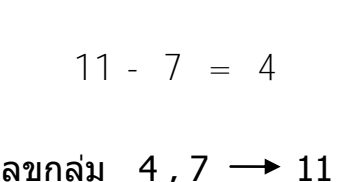


ชื่อ – นามสกุล

คะแนน

จากตัวอย่างความสัมพันธ์ในกลุ่มเลข นำมาเขียนคำตอบ

ดย.	 $7 + 4 = 11$	 $4 + 7 = 11$	 $11 - 4 = 7$	 $11 - 7 = 4$
1	$4 + 9 = \square$	$9 + 4 = \square$	$13 - 9 = \square$	$13 - 4 = \square$
2	$6 + 5 = \square$	$5 + 6 = \square$	$11 - 5 = \square$	$11 - 6 = \square$
3	$5 + 7 = \square$	$7 + 5 = \square$	$12 - 7 = \square$	$12 - 5 = \square$
4	$8 + 7 = \square$	$7 + 8 = \square$	$15 - 7 = \square$	$15 - 8 = \square$
5	$3 + 9 = \square$	$9 + 3 = \square$	$12 - 9 = \square$	$12 - 3 = \square$
6	$8 + 6 = \square$	$6 + 8 = \square$	$14 - 6 = \square$	$14 - 8 = \square$
7	$8 + 9 = \square$	$9 + 8 = \square$	$17 - 9 = \square$	$17 - 8 = \square$
8	$5 + 8 = \square$	$8 + 5 = \square$	$13 - 8 = \square$	$13 - 5 = \square$
9	$9 + 5 = \square$	$5 + 9 = \square$	$14 - 5 = \square$	$14 - 9 = \square$
10	$7 + 6 = \square$	$6 + 7 = \square$	$13 - 6 = \square$	$13 - 7 = \square$